


5 $5p + 5p + 5p =$

15 p

6 $2p + 2p + 2p =$

8 p

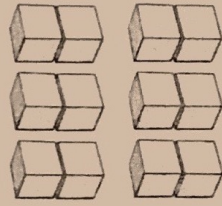
7  $\times 2 =$

10


8 $10p \times 2 =$

20 p

9 Write the number of cubes in words.



twelve

10  $\times 5 =$

25

1 What are four twos added together?

8

2 9 sets of 10 are

90

3 5 times 8 is

40

4 Three twos are

6

5 How much are seven 5p coins altogether?

35 p

6 What are nine groups of 5?

45

7 How many wheels are there altogether on 10 bicycles?

20

8 4 multiplied by 10 is

40

9 How many toes are there on 8 feet?

40

10 There are 10 pencils in a pack. How many are there in 10 packs?

100