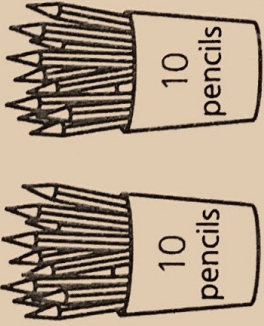



6 2 sets of 10 =



20

7



$\times 5 =$

25

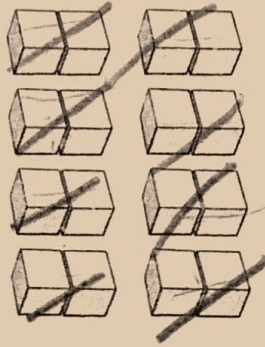
8



$\times 10 =$

20 p

9




Write the number of cubes in words.

nineteen

10

Count in fives to find how many.



35

C Answer

1 Find six times ten.

60

2 When 9 is multiplied by 2 the answer is

18

3 How much are two 2p coins altogether?

4 p

4 5 times 8 is

40

5 Eight tens are

80

6 What are nine sets of 10?

90

7 An apple costs 10p. How much for 6 apples?

60 p

8 5 multiplied by 2 is

10

9 How many socks are there in 2 pairs?

4

10 How long is 10 lots of 10cm?

100 cm