

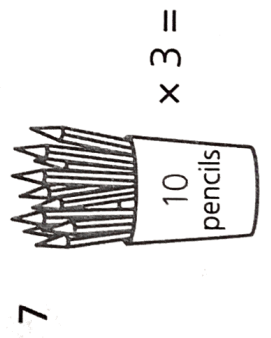

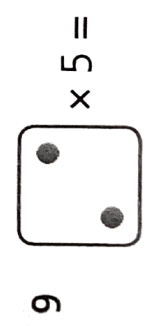


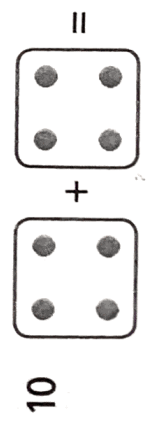
5  =

6  x 5 =

7  x 3 =

8 Count in fives to find how many. 

9  x 5 =

10  + =

1 Multiply six by ten. _____

2 Ten times two is _____

3 How much are eight 5p coins altogether? _____ p

4 How many boots are there in 6 pairs? _____

5 8 times 10 is _____

6 Ten fives are _____

7 A banana costs 10p. How much for 9 bananas? _____ p

8 What are seven sets of ten? _____

9 1 multiplied by 2 is _____

10 How many fingers are there on 8 gloves? _____