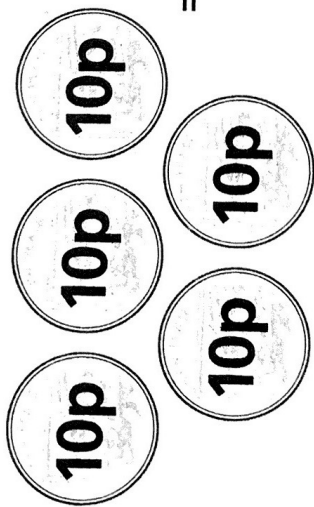
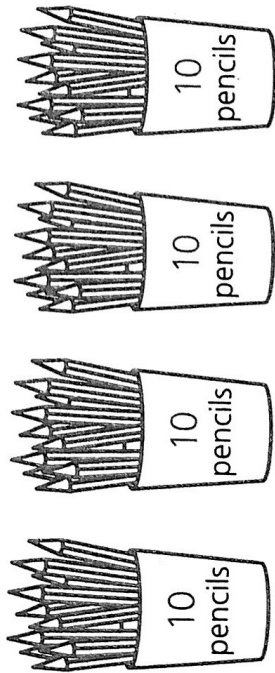


6




7

8 4 sets of 10 =



9 **5p** × 6 =



10

1 10 plus 10 plus 10 is

2 2 sets of 10 are

3 1 times 5 is

4 How much are four 5p coins?

5 Six tens are

6 Multiply 8 by 10.

7 Double 5 and then double the answer.

8 Jo earns £8 each week for 5 weeks. How much does she earn?

9 A toffee costs 7p. How much do 10 toffees cost?

10 How many toes on 2 feet?