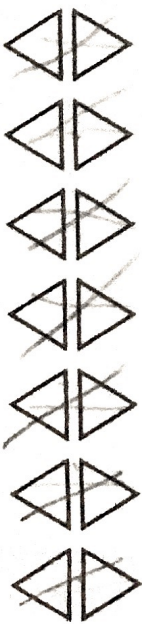



5 How many triangles?



14

6



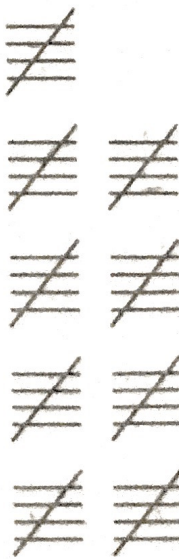
12

7




10 p

8 Count in fives to find how many.



45

9



45 p

10



What is the total?

6

1 Two fives are

10

2 5 times 2 times 10 is

100

3 7 sets of 10 are

70

4 How much are seven 5p coins?

35 p

5 1 times 2 is

2

6 Multiply 5 by 10.

50

7 Double 2 and then double the answer.

8

8 How many fingers on 6 gloves?

30

9 Oliver spends £2 each week for 10 weeks. How much does he spend?

£ 20

10 An orange costs 10p. How much for 4 oranges?

40 p