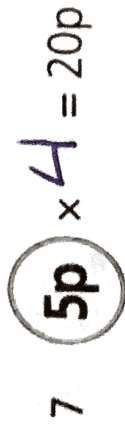
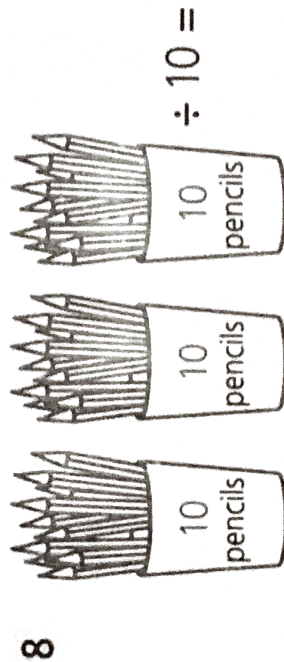





45



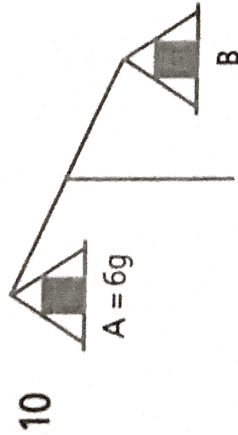
4



3



16



B is five times as heavy as A. How heavy is B?

30 g

- 1 Multiply seven by ten.
- 2 How many fives in 35?
- 3 Ten times eight is
- 4 90g shared between 10 is
- 5 Forty-five divided by five is
- 6 25 divided by 5 is
- 7 £6 is shared between 2 people. How much each?
- 8 4 multiplied by 10 is
- 9 How many 5p coins make 50p?
- 10 A pear costs 10p. I spent 70p on pears. How many did I buy?