
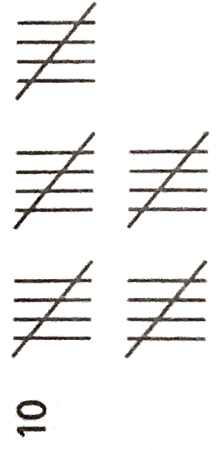
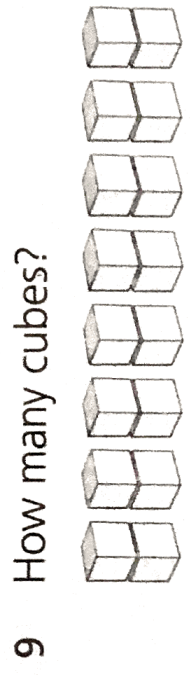
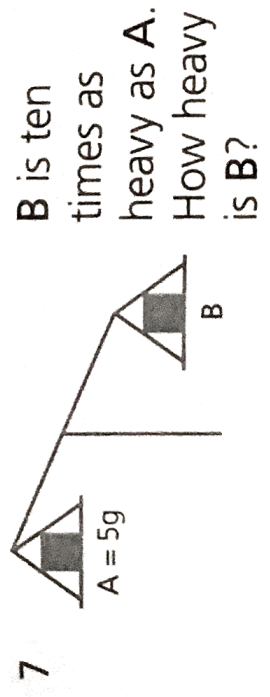


6   $\times 9 =$



1 Divide 30 by 10.

2 How many twos in six?

3 5 times 10 is

4 How many 2p coins are equal to 20p?

5 What is 6 groups of 10?

6 There are 40 fingers. How many gloves?

7 There are 14 people. How many legs?

8 Some weights are 10g each. How heavy are 10 of these weights altogether?   
 g

9 A ribbon is 50cm long. It is cut into 10 equal pieces. How long is each piece?   
 cm

10 There are 8 motorbikes. How many wheels?